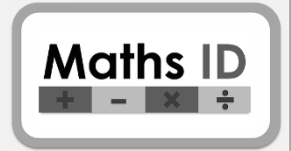


Maths ID Essential Numeracy
Summative assessment (exam)
Entry Level 1 - SAMPLE



Student name		Date						Score	/30
--------------	--	------	--	--	--	--	--	-------	-----

--	--	--	--	--	--	--	--	--	--

Assessor name		Assessor signature	
---------------	--	--------------------	--

--	--	--	--	--	--	--	--	--	--

Grade	
-------	--

Grade boundaries:

	Minimum percentage	Marks out of 30
A	90%	27 - 30
B	75%	23 - 26
C	60%	18 - 22
D	45%	14 - 17
E	30%	9 - 13
U	(Below 30%)	0 - 8

This summative assessment must be conducted under strict exam conditions.

Students should not be allowed to see the paper prior to the assessment, however the questions it contains are of the same style as those found in the Maths ID progress tests.

The assessment becomes progressively more difficult, and a student may stop at any point at which they feel they cannot continue. This will still produce a fair and representative result.

The maximum time allowed for the completion of the assessment is two hours. This may be undertaken over several sessions as long as the paper is kept securely.

In order to avoid conflict of interest, the assessment should not be invigilated by the teacher of the students being assessed.

For any further information please use the contact page at www.mathsid.com



Entry Level 1 Summative assessment (exam)

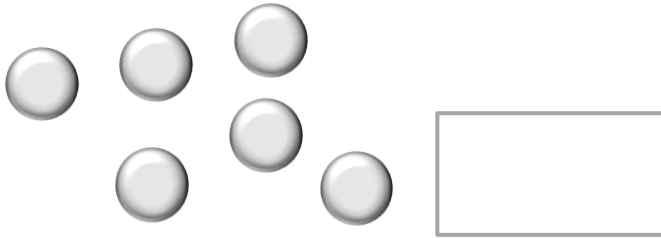
SAMPLE

Questions 1 – 10: Non-calculator section


Maths ID



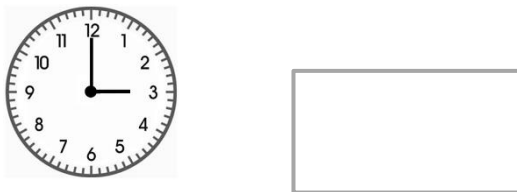
1) How many counters are here?



2) What is the **total** value of these coins?



3) What number is the **hour** hand pointing to?



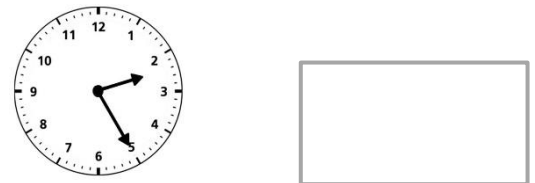
4) Circle the smallest number.

5	6
7	8

5) What is the **total** value of these coins?



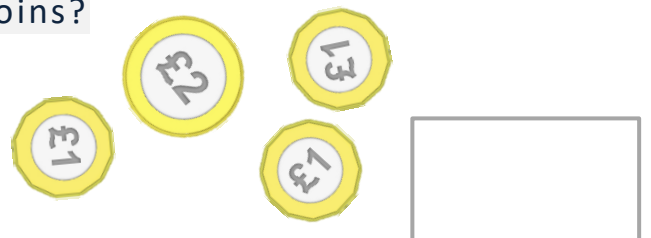
6) What number is the **minute** hand pointing to?



7) Circle the biggest number.

6	8
9	7


8) What is the **total** value of these coins?



9) What time does the clock show?



10)



$$3 + 4 =$$

Mark for this page :

/10



11) What is the **total** value of these coins?



12) Which time is **earlier** in the day?

7 a.m. or **7 p.m.**

13)

$$4 + 4 =$$


14) What is the **total** cost of these items?



15) Which time is **later** in the day?

10 a.m. or **6 p.m.**

16)



$$7 - 2 =$$

17) How much change should be given, when paying for this item with a £5 note?



18) Which time is **earlier** in the day?

noon or **10 a.m.**

19)


$$8 - 5 =$$

20) How much change should be given, when paying for this item with a £10 note?





21) This clock shows 6 o'clock. What time is **1 hour later** than 6 o'clock?



22) This clock shows 5 o'clock. What time is **1 hour before** 5 o'clock?



23)

$$5 + 0 =$$

24) Which number bonds with **6 to make 10**?

25) This clock shows 9 o'clock. What time is **1 hour after** 9 o'clock?



26) This clock shows 7 o'clock. What time is **1 hour earlier** than 7 o'clock?





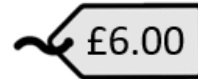
27)

$$45 + 23 =$$

28) How much change should be given, when paying for this item with a £20 note?



29) What is the **total** cost of these items?



30) What is the **total** cost of these items?



END OF TEST

Mark for this page :

/4